

Atomic Energy Education Society  
Half Yearly Examination-2019-20

Class : V  
Subject : English

Time : 3 Hrs.  
Marks : 80

---

To be filled by the student

Student's Name : \_\_\_\_\_

Name of the School : \_\_\_\_\_

Class/Sec. : \_\_\_\_\_ Roll No. : \_\_\_\_\_ Date of Examination : 20.09.2019

---

To be filled by the teacher

Invigilator's Sign : \_\_\_\_\_

Examiner's Sign : \_\_\_\_\_

Marks obtained : \_\_\_\_\_

---

**Section A- Reading ( 20 Marks)**

**A1. Read the following passage and answer the questions given below.**

One day, when Robinson was going towards his boat, he was surprised to see the footprint of a man on the sand. He stood amazed! He listened; he looked around himself; he could neither hear nor see anything, he went up higher to look down; he went up and down the shore, but it was no good; he could find no other footprint but that one. He went to it again to see if there were any more footprints and to see if it had been his imagination. But he was not mistaken, for there was exactly the print of a foot – toes, heel, every part of a foot. He could not imagine how it had come there.

He stayed long time thinking, but became more and more confused.

**A1.1 Choose the correct answer.****3x1=3**

- 1) What did Robinson discover one day?  
a) A boat    b) A footprint    c) A man
- 2) Why did he go up higher to look down?  
a) To see if anybody was there  
b) In search of food  
c) For a stroll
- 3) He was more and more confused because  
a) he saw a few footprints.  
b) he saw a big animal.  
c) he saw no one except one footprint.

**A1.2. Write the correct answer.****1x2=2**

- a) Find the word from the passage that means the same as

***the land along the edge of the sea*** - \_\_\_\_\_

- b) Another word for “***surprised***” from the passage - \_\_\_\_\_

**A2. Read the following passage and answer the following questions given below.**

One morning when the geese had gone out in search of food, a hunter came to the forest. “So this is where the wild geese live,” he said to himself. “When they come back in the evening, I shall catch them.”

The hunter climbed up the tree with the help of the creeper. He got to the top and spread the net there. Then he climbed down and went away.

In the evening, the geese returned home. They did not notice the net. As they flew into the tree, they were trapped. They struggled hard to get out, but could not.

“Help! Help!” cried the geese. “We are caught in the hunter’s net. Oh! What shall we do?” “Don’t make a fuss now,” said the wise old bird. “Long ago I told you to destroy the creeper, but you did not. Now see what has happened. Tomorrow morning the hunter will come back and kill us all.”

**A2.1 Choose the correct answer.****1x3=3**

- 1) \_\_\_\_\_ came when the birds were away.
- a) A hunter              b) A creeper              c) A wise old bird
- 2) The hunter climbed up the tree \_\_\_\_\_.
- a) with the help of a ladder
- b) with the help of the creeper
- c) with the help of a rope
- 3) When did the old bird advise the geese to destroy the creeper?
- a) when the creeper was so small.
- b) when the creeper was thick.
- c) when the creeper was fully grown.

**A2.2 Write the correct answer.****1x2=2**

- a) Singular form of “ **geese**” is \_\_\_\_\_
- b) Find the past tense of the word of “**catch**” from the passage- \_\_\_\_\_

**A3. Read the following story and answer the questions given below.**

Joshi was wandering through the trees. The air smelled of oranges all around him. The weather was perfect, and the oranges were growing bigger by the day. He liked to walk through the groves, and loved the smell of the oranges, but he didn't like that he and his family ate oranges all the time.

Sometimes, he wanted to avoid them for weeks at a time.

He wished his family could grow other things, like corn, or the ingredients for his favourite dish that his mom made. His mouth watered just thinking about his favourite dish. Yes, those ingredients would be better than oranges all the time.

“Mom, why do we have to have oranges almost every day? Joshi asked.

“Well, since we grow them, there are plenty around,” his mom replied.

“Does every kid eat as many oranges as we do?” he asked.

“No, definitely not. There are parts of the country and parts of the world that don’t have the weather that oranges grow in. We’re actually very lucky!”

“So some kids don’t eat oranges at all?”

“We actually send oranges all over the world, so that if people can’t grow their own oranges, they can still buy and eat them,” said Mom.

“Hmmm...so people move foods all over the world? Are there foods that I like that don’t grow here?”

**\*Glossary:**

*grove – a group of trees that produce fruits or nuts*

**A3.1 Choose the correct the answer.**

**1 x 4 =4**

1) Joshi was wandering through the \_\_\_\_\_.

- a) Mango grove                      b) palm grove                      c) orange grove

2) His family used to eat oranges almost every day because

- a) they bought many oranges.  
b) they liked oranges.  
c) they grow oranges.

3) His mouth watered thinking about -

- a) oranges                      b) his favourite dish                      c) chocolates

4) What did Joshi’s family do with the oranges?

- a) They sell.  
b) They make jam and juice and sell.  
c) They eat all the oranges.



**A3.2. State whether the following sentences are True or False.**

**1x2 =2**

a) The oranges grow in all the parts of the country. (            )

b) People move foods all over the world. (            )

**A3.3. Answer the questions.**

**1x2=2**

a) Why do you think Joshi wanted to avoid oranges for weeks at a time?

---

---

b) Complete the sentence.

My favourite fruit is \_\_\_\_\_.

**A3.4. Answer in one word.**

**1x2=2**

a) A word in the passage which means

*things that are used to make a dish* - \_\_\_\_\_

b) Find the opposite word of "**worse**" from the passage- \_\_\_\_\_

**SECTION B- TEXTUAL QUESTIONS (10 MARKS)**

**B1.1. Answer in one word.**

**1x2=2**

a) Who said, "You can't waste all these bits and pieces of vegetables. Find a way to use them."? \_\_\_\_\_

b) Who was Rip's constant companion? \_\_\_\_\_

**B1.2. Answer the following questions.**

**2x4=8**

a) In which season is ice cream popular? Why?

---

---

b) What is important in teamwork? Why?

---

---

c) What kind of a man was Rip Van Winkle? Write two sentences about him.

---

---

d) Which character do you like more- Muna's or Bhaiya's? Why?

---

---

**SECTION C – CREATIVE WRITING (10 MARKS)**

**C1. Write a short story based on any one of the following morals. (5 Marks )**

Unity is strength. **OR** A friend in need is a friend indeed.

(Write in about 7 to 10 sentences)

---

---

---

---

---

---

---

---

---

---

---

**C1.2 Look at the picture and describe it in your own words. Write a paragraph in about 75-100 words.** (5 Marks )

You may use the word clues given in the brackets.

*(cleanliness drive , awareness, society, learning, surroundings, habit, participation)*



---

---

---

---

---

---

---

---

---

---

## **SECTION D – GRAMMAR (15 MARKS)**

### **D1.1. Do as directed.**

#### **1. Frame a question.**

**1**

He wrote an interesting story.

- a) What he wrote?    b) What has he written?    c) What did he write?

#### **2. Pick out the silent letter/letters.**

**1**

Honest \_\_\_\_\_

- a) h                      b) hs                      c) ht

#### **3. Write a describing word-**

**1**

Robinson was a \_\_\_\_\_ man.

#### **4. Fill in the blanks with the correct word.**

**1x2=2**

- a) Ram \_\_\_\_\_ walks to school as he lives near the school.

( *never / rarely / usually* )

- b) I have been down with fever \_\_\_\_\_ two days. ( *for / since* )

#### **5. Complete the following sentences using the correct form of the verb 'learn'.**

**1x2=2**

- a) The students have \_\_\_\_\_ about "Road Safety".

- b) Did you \_\_\_\_\_ to sing and dance?

#### **6. Fill in the blanks given below with question words.**

**1x2=2**

- a) \_\_\_\_\_ is your birthday?

- b) \_\_\_\_\_ is knocking at the door?

#### **7. Choose the correct preposition and fill in the blanks.**

**1x2=2**

- a) The birds were caught \_\_\_\_\_ the net. (in /by/ at)

- b) The children walked \_\_\_\_\_ the bridge. (above/ over/ on)

**D1.2. Use the joining words given in the box for joining the sentences correctly by matching them and rewrite the sentences in the lines given below.** **1x4=4**

<i>and</i>	<i>so</i>	<i>but</i>	<i>because</i>
------------	-----------	------------	----------------

- |                             |                            |
|-----------------------------|----------------------------|
| a) I went to sleep early.   | She failed.                |
| b) Ruby tried hard.         | He likes to write stories. |
| c) He likes to write poems. | I did not go to school.    |
| d) I was sick.              | I was terribly tired.      |

- a) \_\_\_\_\_
- b) \_\_\_\_\_
- c) \_\_\_\_\_
- d) \_\_\_\_\_

**SECTION E – VOCABULARY (10 MARKS)**

**E1. Match the words with their meanings.** **1x4=4**

- |               |   |
|---------------|---|
| a) baton      | wild people in primitive state (   )              |
| b) winding    | solid base (   )                                  |
| c) savages    | short tube or stick carried in a relay race (   ) |
| d) foundation | go in a circular, spiral course (   )             |

**E2. Write the correct word in each blank.** **1x2=2**

- a) People were \_\_\_\_\_ to see how he disappeared from the stage.  
( *happy / amazed* )
- b) I want to be \_\_\_\_\_ for the party. ( *well-dressed / odd-looking* )

**E3. Make new words by adding / dropping a few letters.** 1

happy - happier \_\_\_\_\_

**E4. Write a short form of the word –** 1

*I have* - \_\_\_\_\_

**E5. Write words that rhymes with-** 1x2=2

a) log - \_\_\_\_\_

a) tear - \_\_\_\_\_

**SECTION F – SPELLING (10 MARKS)**

**F1. Identify the misspelt words in the box and write them correctly on the lines below.**

½ x4=2

<i>eldar</i>	<i>true</i>	<i>castel</i>	<i>because</i>	<i>shrik</i>	<i>cryed</i>
--------------	-------------	---------------	----------------	--------------	--------------

\_\_\_\_\_  
\_\_\_\_\_

**F2. Rearrange the jumbled letters to form meaningful words.** 1x2=2

l a i s n d = \_\_\_\_\_ s e i w - \_\_\_\_\_

**F3. Write the correct word by using the clues.** 1

*A person who lives next to or near another person* - N \_ \_ \_ g h \_ \_ o \_ \_ r

**F4. Circle the word that is correctly spelt.** 1 x3 =3

a) intresting                      intersting                      interesting

b) dinner                          dinnar                          diner

c) wistle                          whistle                          whiltel

$$1 \times 2 = 2$$

---

G. Sports and games are very beneficial to us as they teach us punctuality, patient, discipline, teamwork, and dedication. Playing sports help us in building and improving confidence level. If we practise sports on regular basis, we can be more active and healthy. Being involved in the sports activities help us in getting protected with numerous diseases such as arthritis, obesity, heart problems, diabetes etc.

This image shows a full page of white paper with horizontal blue or grey ruling lines. The lines are evenly spaced and run across the width of the page, providing a template for handwriting practice. There are no margins, text, or other markings on the page.

[illegible]



Total No. of printed pages: 15

**ATOMIC ENERGY EDUCATION SOCIETY  
HALF YEARLY EXAMINATION (2019-20)**

**Class - V**

**Time – 3 Hours**

**Subject - EVS**

**Marks - 80**

**To be filled by the student**

Name of the student : \_\_\_\_\_

Name of the school : \_\_\_\_\_

Class/Sec : \_\_\_\_\_ Roll no. : \_\_\_\_\_ Date of Exam: 16.09.2019

Signature of the Invigilator : \_\_\_\_\_

Signature of the Examiner : \_\_\_\_\_

Signature of the Checker : \_\_\_\_\_

Marks obtained

---

**OBSERVATION AND REPORTING (30 MARKS)**

**Q.1 Choose the correct answer and fill in the blanks.**

**(5X1=5)**

i) A sloth moves around \_\_\_\_\_ trees in its lifetime.

(5      8      10)

ii) \_\_\_\_\_ can be kept fresh by boiling it.

(Curd    ghee    milk)

iii) \_\_\_\_\_ are killed for their tusks.

(Tigers      Elephants    Crocodiles )

iv) Lack of haemoglobin in blood causes \_\_\_\_\_.

(cholera    diabetes    anaemia)

v) Sunita Williams went \_\_\_\_\_ kilometres away from the earth.

(360          260          460)

**Q.2 Observe the picture and answer the following.**

**(5x2=10)**

**a)**



i) Identify the animal in the picture.

\_\_\_\_\_.

ii) How does this animal warn other animals about a danger?

\_\_\_\_\_.

**b)**




i) Which musical instrument is shown in the picture?

\_\_\_\_\_.

ii) Name the people who play such instruments.

\_\_\_\_\_.

**c)**



i) Name the person shown in the picture.

\_\_\_\_\_.

ii) Why did she come to India?

\_\_\_\_\_  
\_\_\_\_\_.

d)



i) Name the instrument shown in the picture.

---

ii) What is the function of this instrument?

---

---

e)



i) What is shown in the picture?

---

ii) For what purpose is it used?

---

**Q.3 Match the following**

**(4X1=4)**

Lizard

He came from Uzbekistan.

Dandi March

It sleeps in cold season.

Al-Biruni

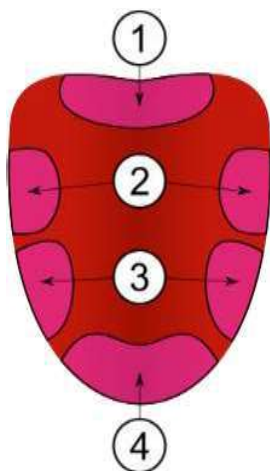
It is a kind of gun.

Cannon

It took place in 1930.

**Q.4 Label the different taste zones of the tongue.**

**(4X½ = 2)**



1) \_\_\_\_\_

2) \_\_\_\_\_

3) \_\_\_\_\_

4) \_\_\_\_\_

**Q.5 Circle the odd one out.**

**(4x1=4)**

i) apple

carrot

rice

pizza

ii) been

tumba

dhol

kanjiri

iii) malaria

dengue

chickengunia

typhoid

iv) clove

mustard seed

ani seed

maize

**Q.6 Look at the picture carefully and answer the following questions. (5x1=5)**

**(A)**



i) Name the doctor who did this experiment.

\_\_\_\_\_.


ii) What did he find in his experiment?

\_\_\_\_\_.

iii) How is digestion of food affected if a person is sad or not well?

\_\_\_\_\_.

**(B)**



i) What is the name of the plant?

\_\_\_\_\_.

ii) Where is it found in India ?

\_\_\_\_\_.

**IDENTIFYING GROUP AND CLASSIFICATION (25 MARKS)**

**Q.7 Do as directed.**

I) Answer the following in **one** word. **(4x1=4)**

a) The poisonous teeth of a snake. \_\_\_\_\_

b) The liquid which gives instant energy. \_\_\_\_\_

c) The mosquito which causes malaria. \_\_\_\_\_

d) Tiny thread like things which hatches from the eggs of mosquitoes. \_\_\_\_\_

II) Give examples: **(6x1=6)**

a) Animals having sharp sense of smell.  
\_\_\_\_\_

b) Poisonous snakes found in India.  
\_\_\_\_\_

c) Festivals related to moon.  
\_\_\_\_\_

d) Methods of preserving food.  
\_\_\_\_\_

e) Seeds used as spices in the kitchen.  
\_\_\_\_\_

f) Diseases caused by flies.

\_\_\_\_\_

III. Give reason:

(4x2=8)

a) Food grains are dried in the sun before being packed.

\_\_\_\_\_  
\_\_\_\_\_.

b) We cannot taste the food properly when we have a cold.

\_\_\_\_\_  
\_\_\_\_\_.

c) A drain is dug around the tent of the mountaineers.

\_\_\_\_\_  
\_\_\_\_\_.

d) A person cannot be drowned in the 'Dead Sea'.

\_\_\_\_\_  
\_\_\_\_\_.

IV. Classify the things given in the box according to their properties. (4x ½ =2)

<b>milk</b>	<b>soap- case</b>	<b>oil</b>	<b>marble</b>
-------------	-------------------	------------	---------------

Floats in water	Sinks in water	Dissolves in water	Does not dissolve in water



V. Look at the picture carefully and answer the following.

(5x1=5)



i) Where is this monument located?

---

ii) Name the dynasty (a succession of people from the same family) that ruled here from 1518 to 1687?

---

---

iii) How many bastions are there in the outer wall of the fort?

---

---

iv) Why couldn't Aurangzeb's army get into the fort?

---

---

---

---

v) How do people spoil monuments?

---

---

**DISCOVERY OF FACTS (25 MARKS)**

**Q8. Answer the following questions in one sentence.**

**( 3x1=3)**

i) What helps a tiger move in the dark?

---

---

ii) Why did Appa first choose the most ripe mangoes to be used for making mamidi tandra?

---

---

---

iii) Why do things float in the spaceship?

---

---

---

**Q9. Tick the correct answer:**

**(5x1=5)**

i. What appears in and around the water surface during rainy season?

a) cinchona

b) algae

c) pitcher plant

d) tulsi

ii. What is the name of the Mount Everest in Nepal?

- a) Rohtang pass      b) Kanchanjanga      c) Sagarmatha      d) Nanda devi

iii. Which one is soaked in water before cooking?

- a) wheat                  b) maize                  c) chana                  d) bajra

iv. What is the main source of water?

- a) spring                  b) pond                  c) well                  d) rain

v. It is a design used in rangoli, embroidery as well as in decoration in Saurashtra, Gujarat and South India. Which one is it?

- a) bandanwar      b) wall hanging      c) naag gumphan      d) carpet

**Q10. Answer the following questions in two or three sentences. (5x2=10)**

1. Why do dogs urinate on the road?

---

---

---

---

2. Why did Gopal's mother tie the chana in a damp cloth?

---

---

---

---

3. How was Velcro discovered?

---

---

---

---

4. What are the problems caused due to anaemia in children?

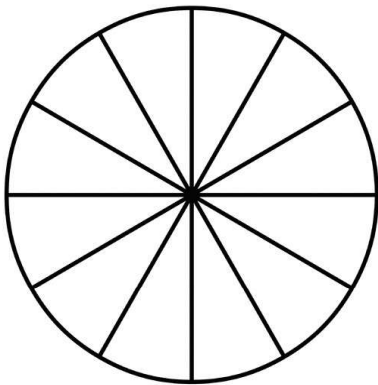
---

---

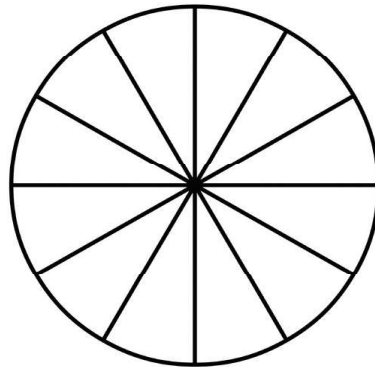
---

---

5. Shade and write the sleeping hours of the following animals.



Cow \_\_\_\_\_



Giraffe \_\_\_\_\_

**Q.11. Look at the picture of a stepwell and answer the following questions.**

**(5x1=5)**



i) What is a stepwell?

---

---

---

---

ii) Why were stepwells built in olden times?

---

---

---

---

iii) How is a stepwell different from a well?

---

---

---

---

iv) Why was the stepwell in Jodhpur cleaned after so many years?

---

---

---

v) Write the other name for stepwell.

---

---

---

**Q.12. Locate the following states on the map of India.**

**(4x ½ = 2)**

- a) Uttarakhand      b) Andhra Pradesh      c) Gujarat      d) Odisha



# परमाणु ऊर्जा शिक्षण संस्था

अणुशक्तिनगर, मुंबई – 400094

अर्द्ध वार्षिक परीक्षा- (टर्म -1) (2019 -20)

(कुल पृष्ठों की संख्या – 10)

---

कक्षा – पाँचवीं (5)

विषय –हिंदी

समय – 3 घंटे

पूर्णांक - 80

विद्यार्थी का नाम- -----

कक्षा / वर्ग- ----- अनुक्रमांक ----- दिनांक -----

विद्यालय का नाम- -----

---

निरीक्षक के हस्ताक्षर -----

परीक्षक हस्ताक्षर -----

प्राप्तांक -----

जाँचकर्ता के हस्ताक्षर -----

---

सामान्य निर्देश-

शुद्धता और स्वच्छता का ध्यान रखते हुए सभी प्रश्नों के उत्तर निर्देशानुसार लिखना अनिवार्य है।



प्रश्न 1. निम्नलिखित गद्यांश को पढ़कर नीचे लिखे प्रश्नों के उत्तर लिखिए।

एक बार फिर निराश लोनपो गार का बेटा शहर में उसी जगह जा बैठा। न जाने क्यों उसे यकीन था कि वह लड़की उसकी मदद के लिए ज़रूर आएगी। और हुआ भी कुछ ऐसा ही, वह लड़की आई। उससे उसने अपनी मुश्किल कह सुनाई, “अब तो बिना जौ के सौ बोरों के मेरे पिता मुझे घर में नहीं घुसने देंगे।” लड़की सोचकर बोली, “एक तरीका है।” उसने भेड़ों के सींग काट लिए। उन्हें बेचकर जो रूपए मिले उनसे सौ बोरे जौ खरीदे। बोरे लोनपो गार के बेटे को सौंपकर लड़की ने उसे घर भेज दिया।

क) निराश होकर लोनपो गार का बेटा कहाँ बैठ गया ? (1)

उ) -----  
-----

ख) लड़की ने किसके सींग काट दिए ? (1)

उ) -----  
-----

ग) सींग बेचकर लड़की ने क्या किया ? (1)

उ) -----  
-----

घ) समान अर्थ वाला शब्द लिखिए। (1)

यकीन - -----

ड.) लिंग बदलो। (1)

बेटा - -----

प्रश्न 2. निम्नलिखित गद्यांश को पढ़कर नीचे लिखे प्रश्नों के उत्तर लिखिए।

बहुत पुराने समय में कबूतरों के द्वारा संदेश भेजे जाते थे। जब संदेशवाहक कबूतरों की बात हो रही है तो उन इंसानों की बात कैसे न हो जो ऐसे समय से डाक पहुँचाने का काम करते रहे, जब संचार और परिवहन के साधन बेहद सीमित थे। बात हो रही है उन हरकारों की जो पैदल ही आम आदमी तक चिट्ठी – पत्री पहुँचाने का काम करते रहे। राजा

महाराजाओं के पास घुड़सवार हरकारे हुआ करते थे। हरकारों को न सिर्फ हर तरह की जगहों पर पहुँचना होता था, बल्कि डाक की रक्षा भी करनी होती थी। डाकू, लुटेरों या जंगली जानवरों की चपेट में आने का डर हमेशा बना रहता था। आज भी भारतीय डाक सेवा दुर्गम व पहाड़ी इलाकों तक डाक पहुँचाने के लिए हरकारों पर निर्भर करती है। जम्मू - कश्मीर के लद्दाख खंड में पदम (जंस्कार) जैसी कई जगह हैं जहाँ हरकारे डाक पहुँचाते हैं।  
प्रश्न. सही विकल्प पर सही (✓) का निशान लगाओ।

क) बहुत पुराने समय में किसके द्वारा संदेश भेजे जाते थे ? (1)

i) घोड़ों के द्वारा ☐ ii) कबूतरों के द्वारा ☐ iii) फोन से ☐ iv) मोबाइल से ☐

ख) लद्दाख किस राज्य में है ? (1)

i) हिमाचल प्रदेश ☐ ii) उत्तराखंड ☐ iii) जम्मू – कश्मीर ☐ iv) पंजाब ☐

ग) “सीमित ” शब्द का क्या अर्थ है ? (1)

i) कम या थोड़ा ☐ ii) अधिक ☐ iii) संसार ☐ iv) सीमा ☐

घ) खाली स्थान को उपर्युक्त गद्यांश से सही शब्द चुनकर भरो। (1)

i) हरकारे पैदल ही आम आदमी तक ----- पहुँचाने का काम करते थे।

ड.) हरकारों को किस का डर बना रहता था ? (1)

उ) -----

-----

प्रश्न 3. निम्नलिखित अपठित गद्यांश को पढ़कर नीचे लिखे प्रश्नों के लिखिए।

महाराज भगीरथ कठोर तपस्या के बाद गंगा को स्वर्ग से पृथ्वी पर लाए। इसी कारण गंगा का नाम भागीरथी पड़ा। गंगा नदी पर भारतवासियों की असीम श्रद्धा है। वह उनके सुख – दुख की साथी रही है। गंगा का भारत की सांस्कृतिक, धार्मिक और सामाजिक परंपराओं तथा राजनैतिक परिवर्तनों से भी अटूट संबंध रहा है। गंगा युगों से चली आ रही भारतीय सभ्यता और संस्कृति की प्रतीक है। देश के अधिकांश पवित्र स्थान इसी नदी के किनारे स्थित हैं। हरिद्वार, ऋषिकेश, प्रयाग, काशी आदि तीर्थस्थल गंगा के पावन तट पर बसे हैं। गंगा ने ही उत्तर भारत के मैदानों को उपजाऊ बनाया है। हिमालय से निकलकर बंगाल की खाड़ी तक की यात्रा में हज़ारों वर्षों से बहती हुई पवित्र गंगा भारत के करोड़ों लोगों का उपकार करने में मग्न है। हिंदू गंगा के जल को पवित्र मानते हैं। यह गंगाजल ही है, जिसे वर्षों तक रखे रहने के बाद भी कीटाणु पैदा नहीं होते हैं। आज भी गंगा में स्नान करके हिंदू अपने को धन्य समझते हैं।

क) गंगा का नाम भागीरथी क्यों पड़ा ? (1)

उ)-----  
-----

ख) गंगा किसका प्रतीक है ? (1)

उ)-----  
-----

ग) गंगा नदी के पावन तट पर कौन – कौन से तीर्थस्थल बसे हैं ? (1)

उ)-----  
-----

घ) गंगा नदी कहाँ से निकलती है ? (1)

उ)-----

ड.) हिंदू अपने – आपको कब धन्य समझते हैं ? (1)

उ) -----  
-----

च) नीचे लिखे वाक्य के सामने सही (✓) या गलत (x) का निशान लगाइए। (1)

गंगा जल को वर्षों तक रखने पर भी कीटाणु पैदा नहीं होते हैं। .....

छ) खाली जगह भरो। (1)

हिंदू गंगा के जल को ----- मानते हैं।

ज) समान अर्थ वाला शब्द लिखो। (1)

पृथ्वी = -----

झ) विलोम शब्द लिखो। (1)

स्वर्ग x -----

ञ) वचन बदलो। (1)

नदी -- -----

प्रश्न 4. निम्नलिखित प्रश्नों के उत्तर लिखिए।

क) तुम अपने साथियों के साथ कौन – कौन से खेल खेलती हो ? (1)

उ) -----  
-----

ख) तुम्हें किसी न किसी बात पर रूठने के मौके तो मिलते ही होंगे ....

अक्सर तुम किस तरह की बातों पर रूठती हो ? (2)

उ) -----  
-----  
-----

ग) रतन की माँ की आँखों में किस तरह की बेबसी झलकती होगी ? (2)

उ)-----  
-----  
-----

घ) तिल के अतिरिक्त तेल किन – किन चीज़ों से बनता है? लिखो। (1)

उ) -----  
-----

ड.) इला की कशीदाकारी में खास बात क्या थी? (2)

उ)-----  
-----  
-----  
-----  
-----

च) तुम मशीन की मदद से पढ़ना चाहोगे या अध्यापक की मदद से? दोनों के पढ़ाने में किस – किस तरह की सरलता और कठिनाइयाँ हैं? (2)

उ)-----  
-----  
-----  
-----  
-----

प्रश्न 5. “डाकिए की कहानी, कैवर सिंह की जुबानी” पाठ के आधार पर कैवर सिंह के बारे में 75 से 100 शब्दों में एक अनुच्छेद लिखो। (5)

अथवा

‘जब मुझे बहुत डर लगा था .....’ ‘मैं जब छोटा था .....’ इस शीर्षक से जुड़े अपने किसी अनुभव का वर्णन 75 से 100 शब्दों में एक अनुच्छेद लिखो।

---

---

---

---

---

---

---

---

---

---

प्रश्न 6. नीचे लिखे किसी विषय पर एक 75 से 100 शब्दों में एक अनुच्छेद लिखिए। (5)

मेरी माँ या मेरा प्रिय त्योहार

---

---

---

---

---

---

---

---

प्रश्न 7. क) ये संज्ञाएँ किन क्रियाओं से बनी हैं? लिखो। (2)

i) बहाव ----- ii) कटाव -----

ख) नीचे दिए गए शब्दों के आगे उचित विशेषण लिखिए। (2)

i) ----- तोता ii) ----- महल

ग) नीचे दिए गए वाक्यों में से क्रिया शब्द छाँटकर लिखो। (2)

i) चिड़िया उड़ रही है। -----

ii) सौम्या गुड़िया से खेल रही है। -----

घ) नीचे दी गई जाति वाचक संज्ञाओं के लिए एक-एक व्यक्तिवाचक संज्ञा लिखो। (2)

i) शहर ----- ii) धातु -----

ड.) समान तुक वाले शब्द लिखो। (2)

i) रेल ----- ii) बाली -----

च) मुहावरों का वाक्यों में प्रयोग करो। (2)

1. आँख का तारा - -----

-----

2. नज़र चुराना - -----

-----

छ) नीचे दिए गए वाक्य किस काल में है ? चुनकर लिखिए। (3)

( वर्तमान काल / भूत काल / भविष्यत् काल )

i) सीता ने पत्र लिखा। -----

ii) मैं शाम को आगरा जाऊँगा। -----

iii) अध्यापक कक्षा में पढ़ा रहे हैं। -----

प्रश्न 8. क) विलोम शब्द लिखो। (2)

i) जल्दी x ----- ii) निराशा x -----

ख) नीचे दिए गए वाक्यांशों के लिए एक – एक शब्द लिखो। (2)

i) जहाँ पहुँचना कठिन हो -----

ii) संगीत जानने वाला -----

ग) “ बे “ उपसर्ग लगाकर दो शब्द बनाओ। (2)

i) ----- ii) -----

घ) वचन बदलो। (2)

i) रुपया ----- ii) खिलौना -----

ड.) नीचे दिए गए शब्द के दो समान अर्थ (पर्यायवाची शब्द) लिखिए। (2)

आकाश -----

प्रश्न 9. क) नीचे दिए गए वाक्यों को शुद्ध करके लिखिए। (2)

i) प्रिया खाना माँगता है।

-----

ii) राम, सीता और लक्ष्मण वन को गई।

-----

ख) निम्नलिखित शब्दों के छूटे हुए अक्षर लिखकर शब्दों को पूरा कीजिए। (3)

i) शिल्प----र      ii) चाँपा----ल      iii) जल----यु

ग) नीचे लिखे शब्दों के अक्षरों के क्रम को बदलकर शुद्ध शब्द बनाओ। (2)

i) तक्षिशिप्र ----- ii) रहरेपदा -----



घ) नीचे दिए गए शुद्ध शब्दों पर गोला लगाओ। (3)

i) भोगालीक      भौगोलिक      भुगोलिक      बौगोलिक

ii) आशिर्वाद      आशीवार्द      आशीर्वाद      आषिर्वाद

iii) संगतराश      संगतरास      सगतरस      संगतराष

प्रश्न 10. नीचे लिखे अनुच्छेद को सुंदर लेख में दुबारा लिखिए। (5)

छब्बीस साल की इला गुजरात के सूरत ज़िले में रहती हैं। उनका बचपन अमरेल ज़िले के राजकोट गाँव में अपने नाना के यहाँ बीता। साँझ होते ही मोहल्ले के बच्चे घरों से बाहर आ जाते। कुछ मिट्टी में आड़ी – तिरछी लकीरें खींचते, कुछ कनेर के पत्तों से पिटपिटी बजाते, कुछ गिट्टे खेलते, कुछ इधर – उधर से दूटे – फूटे घड़ों के ठीकरे बटोरकर पिटू खेलते। जब इन खेलों से मन भर जाता तो पेड़ की डालियों पर झूला डालकर ऊँची – ऊँची पेंगे लेते और ऊँचे स्वर में गीत गाते।

---

---

---

---

---

---

---

---

---

---

**ATOMIC ENERGY EDUCATION SOCIETY  
HALF YEARLY EXAMINATION 2019-20**

Class: V  
Subject: Mathematics

Time: 3 Hrs.  
Max. Marks: 80

---

To be filled by the student

Student's Name: \_\_\_\_\_

Name of the school: \_\_\_\_\_

Class / Sec: \_\_\_\_\_ Roll No: \_\_\_\_\_ Date of Examination: 18 / 09 / 2019

---

To be filled by the teacher

Invigilator's Signature: \_\_\_\_\_

Examiner's Signature: \_\_\_\_\_

Marks Obtained: \_\_\_\_\_

---

**General Instructions:**

- This paper consists of four sections A, B, C and D.
- Each sections carries 20 marks.
- All sections are compulsory.
- Marks for questions are indicated against each.
- Use of any electronic gadget (e.g. calculator, mobile phone etc.) is not permitted.

**SECTION- A KNOWLEDGE (20Marks)**

**A. I. Fill in the blanks with the correct answer.**

**(1x6=6)**

1. One Crore = \_\_\_\_\_ lakhs.
2. 7<sup>th</sup> multiple of 12 is \_\_\_\_\_.
3. The length of the boundary of a closed figure is called its \_\_\_\_\_.
4. The numbers or words which read the same both ways i.e from left to right and right to left are called \_\_\_\_\_.
5.  $\frac{1}{3}$  of a right angle = \_\_\_\_\_ degrees.
6. After \_\_\_\_\_ turn the letter **Z** will look the same .

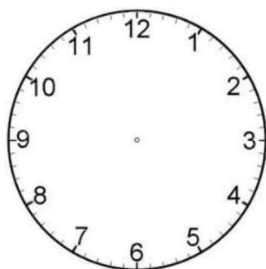
**A. II. Do as directed:**

**(2x5=10)**

1. Gracy took a loan of ₹6000 from a bank to buy a net. She paid back ₹625 every month for one year. How much money did she pay back to the bank after one year?

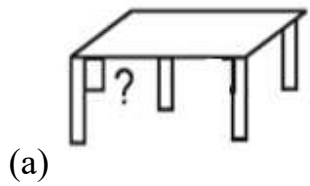
2. Draw the hands of the clock to show the following time and also write the type of angle formed by them.

**Time: 2:20**

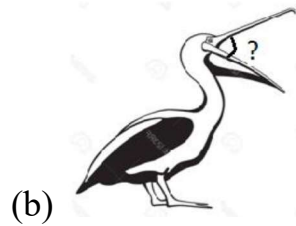


**Angle formed** \_\_\_\_\_

3. Write the name of angles made by figures given below:

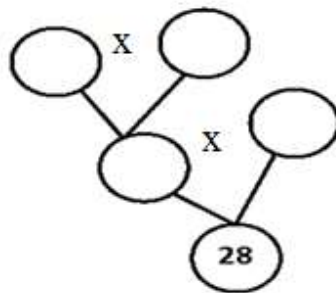


\_\_\_\_\_

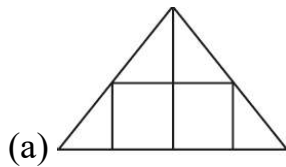


\_\_\_\_\_

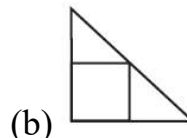
4. Complete the factor tree.



5. Find the area of the following by counting squares.



\_\_\_\_\_



\_\_\_\_\_

A.III Do as directed:

(2x2=4)

(i) Leela has Rs.600 with her. She buys sardines that cost Rs.40 per kg and prawns that cost Rs.160 per kg. She spends  $\frac{1}{5}$  of the amount on sardines and the rest on prawns.

a) Find the amount she spends on each?

b) Find out how many kgs of prawns and sardines did she buy?

SECTION- B UNDERSTANDING (20Marks)

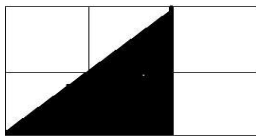
B. I Tick the correct option:

(1x6=6)

(a) Which factor determines the shape of a polygon?

(i) Sides      (ii) lines      (iii) angles      (iv) drawing

(b) The area of the shaded part shown in the rectangle is \_\_\_\_\_sq.cm.( 2, 4, 6 )



(c) The perimeter of a square of side 1cm is \_\_\_\_\_ cm.(1, 4,2 )

(d) The right time of arrival of a train at a station is 6:50. It is running late by half an hour. It will arrive at \_\_\_\_\_ ( 7:30, 7:20, 7:15)

(e)  $\frac{8}{9} = \frac{\quad}{\quad}$ . (16/9, 24/18, 16/18)

(f) LCM of 2, 3, and 5 is \_\_\_\_\_

(i) 10      (ii) 11      (iii) 15      (iv) 30

B. II Observe the pattern and take it forward.

(2x5=10)

(a)  $1\ 23\ 45\ 679 \times 9 = \underline{11111111}$   
 $1\ 23\ 45\ 679 \times 18 = \underline{22222222}$   
 $1\ 23\ 45\ 679 \times 27 = \underline{33333333}$   
 $1\ 23\ 45\ 679 \times 36 = \underline{\hspace{2cm}}$   
 $1\ 23\ 45\ 679 \times \underline{\hspace{1cm}} = \underline{\hspace{2cm}}$

(b) Ram rides his bike at a constant speed of 20 km/hour. How long will he take to travel a distance of 60 kilometers?

(c) Guess the secret number.

It is larger than half of 100.


It is more than 5 tens and less than 6 tens.

The tens digit is 2 more than the ones digit.

Together the digits have a sum of 8.


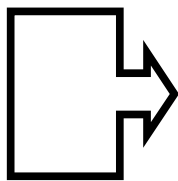
What number is it?

- (d) This is a rectangle of 12 sq.cm. Draw a straight line to divide it into two equal rectangles. Find the area of the each of the small rectangles.



Area of each small rectangle = \_\_\_\_\_

- (e) Divide the following pictures into two mirror halves by drawing a line.



B. III Observe the following price list and do the given question. (1 x 4= 4)

Item	Price per kg
Tomato	₹ 24
Onion	₹ 20
Carrot	₹ 48

- a) 2 kg tomato = ₹ \_\_\_\_\_
- b) 1 ½ kg Onion = ₹ \_\_\_\_\_
- c) 1 ¼ kg Carrot = ₹ \_\_\_\_\_
- d) Total amount spent = ₹ \_\_\_\_\_

SECTION- C ABILITY TO COMPUTE (20 Marks)

C. I. Fill in the blanks:

(1x4=4)

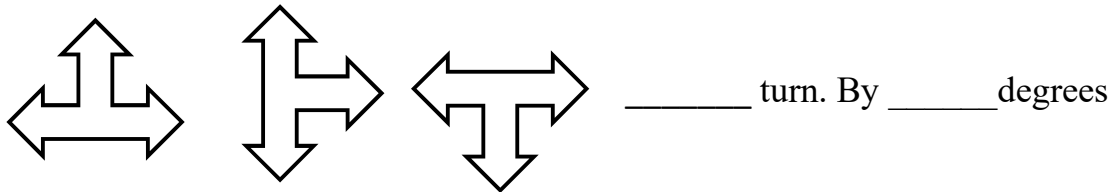
- i) There are about 2 lakhs boats in our country. Half of them are without a motor.

So number of boats with a motor are \_\_\_\_\_.

- ii) In the mathematical fact,  $4 \times 3 = 12$ ; 4 and 3 are \_\_\_\_\_ of 12.

- iii) At \_\_\_\_\_ O'clock the hands of a clock make straight angle.

- iv) In the sequence given below, find by how many degrees it rotates each time.



C. II Do as directed:

(2x6=12)

- i) There are 24 hours in a day and we should sleep for  $\frac{3}{8}$  part of the day. How much time should we sleep?

- ii) List all the factors of 48.



iii) What part of Rs.6 is 75 paise?

iv) Draw an angle of  $150^\circ$  by using protractor and name it.

v) Anu wanted to tile the path around her house using tiles of length 3 feet, 4 feet and 5 feet. The mason tiled the first row with 3 feet tiles, the second row with 4 feet tiles and the third row with 5 feet tiles. The mason has not cut any of the tiles. Then what is the shortest length of the path?

vi) The figure shows  $\frac{1}{6}$  petals of a flower. Complete the flower by drawing the other petals and colour it.



C. III Look at the following stamps and answer the given questions. (1x4=4)



1. How many squares of 1cm does stamp D cover? \_\_\_\_\_
2. Which stamp has the biggest area? \_\_\_\_\_ How many squares? \_\_\_\_\_
3. Which two stamps have the same area? \_\_\_\_\_
4. The difference between the area of the smallest and the biggest stamp is \_\_\_\_\_ sq.cm

#### SECTION- D PROBLEM SOLVING ABILITY (20Marks)

D.I Write the correct answer for the following: (1x4=4)

i) How many one-eighths are there in a half? \_\_\_\_\_

ii)  $345 + \underline{\hspace{2cm}} + 275 = \underline{\hspace{2cm}} + \underline{\hspace{2cm}} + 712$

iii)     \_\_\_\_\_

iv) Factors of 5 are : \_\_\_\_\_ and \_\_\_\_\_

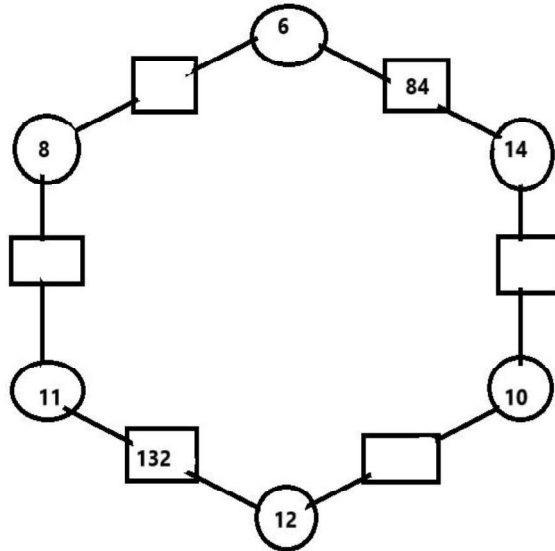
D.II. Do as directed: (2x6=12)

D.II. Do as directed: (2x6=12)

- 1) A cake was divided into 12 pieces. Ram ate  $\frac{1}{6}$  of the cake, Arjun ate  $\frac{1}{4}$  of the cake and Rashi ate  $\frac{1}{3}$  of it. How many pieces did each of them eat? How many pieces were left?
- 2) Anushka purchased 9000 kg potatoes at the rate of Rs. 15 a kg. and prepared chips. She dried the chips. After drying the weight of the chips becomes one third of the potatoes. She sold the chips at the rate of Rs. 70 a kg. How much profit did she earn?
- 3) Two wires 15 cm and 25 cm in length are to be cut into smaller pieces of equal length. What can be the maximum length of each small wire?

4) Complete the following hexagon.

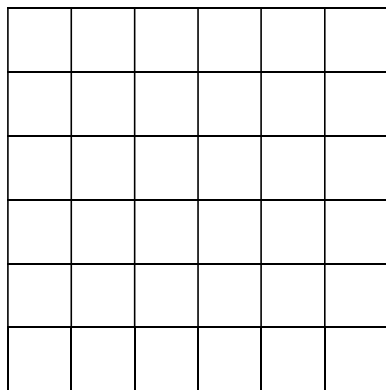
**Rule:** You get the number in each box by multiplying the numbers in the circles next to it.



5. Change the given number 139 into a special number.

6. On a square grid of 36 squares shade the following:

- a)  $\frac{2}{4}$  green      b)  $\frac{1}{3}$  red



Number of green squares = \_\_\_\_\_

Number of red squares = \_\_\_\_\_

D. III Look at the following Chintu's garden which is divided into 9 equal parts. He grows different flowers on it as shown below . (1x4=4)

<b><i>sunflower</i></b>	<b>rose</b>	LILY
BLUEBELL	<b><i>sunflower</i></b>	MARIGOLD
LILY	<b>rose</b>	<b><i>sunflower</i></b>

Answer the following questions on the basis of the above information:

- (i) Which flower occupies the biggest part of the garden? How much part is it occupied?

---

- (ii) What part of the garden is used to grow bluebell?

---

- (iii) Which two flowers cover an equal area? What part of the garden each one covers?

---

\*\*\*\*\*

Class: 5 Section: Subject: TELUGU Date: \_\_\_\_\_ Marks Obt: \_\_\_\_\_

Roll No: \_\_\_\_\_ Name: \_\_\_\_\_ Invig.: \_\_\_\_\_ Exmnr: \_\_\_\_\_ Max Marks: 80

**I. ఈ క్రింది ప్రశ్నలకు అర్థాలు రాయండి -10 మార్కులు**

1. అభిషేకం \_\_\_\_\_ స్నానం, నమస్కారం
2. ఆవని \_\_\_\_\_ భూమి, ఆకాశం
3. ఆధునికత \_\_\_\_\_ కొత్తది, పాతది
4. త్రివర్ణములు \_\_\_\_\_ రెండు రంగులు, మూడు రంగులు
5. సింగిడి \_\_\_\_\_ నేల, ఇండ్ల ధనుస్సు
6. చావడి \_\_\_\_\_ ఇంటి ముందు స్థలం, ఇంటి వెనుక స్థలం
7. కర్షకుడు \_\_\_\_\_ పొలములో పనిచేసేవాడు, కర్మాగారములో పనిచేసేవాడు
8. జిత్తులమారి \_\_\_\_\_ మోసకారి, మంచివాడు
9. ముష్కరులు \_\_\_\_\_ మంచివారు, చెడ్డవారు
10. కోట \_\_\_\_\_ దుర్గం, సాధారణ ఇల్లు

**II. ఈ క్రింది ఖాళీలను సరైన పదాలచే పూరించండి – 8 మార్కులు**

1. తెలంగాణలో ప్రసిద్ధి పొందిన పుణ్యక్షేత్రం \_\_\_\_\_  
ఎ. యాదగిరిగుట్ట బి. శ్రీశైలం సి. తిరుపతి డి. ఏదికాదు
2. ఈ గుట్ట మీద ఉన్న గుండాన్ని \_\_\_\_\_ అని పిలుస్తారు  
ఎ. విష్ణు గుండం బి. శివగుండం సి. బ్రహ్మగుండం డి. ఏదికాదు
3. సాలార్ జంగ్ మ్యూజియం ఏ ఆకారంలో ఉన్నది \_\_\_\_\_  
ఎ. సూర్యచంద్రాకారం బి. పూర్తి చంద్రాకారం సి. అర్ధచంద్రాకారం డి. ఏదికాదు
4. సాలార్ జంగ్ మ్యూజియం లోని వస్తువులను సేకరించిన రాజు పేరు \_\_\_\_\_  
ఎ. తానీషా బి. మీర్ యూసుఫ్ అలీఖాన్ జంగ్-III  
సి. మీర్ యూసుఫ్ లతీఫ్ ఖాన్ జంగ్-I డి. ఏదికాదు
5. ఆరోజు బడికి సెలవు కావటం వలన పిల్లలందరు \_\_\_\_\_ చెట్టు కింద ఆటలాడుకుంటున్నారు  
ఎ. ఈతచెట్టు బి. తాటిచెట్టు సి. మామిడిచెట్టు డి. ఏదికాదు

6. రైతన్నల చెమట చుక్క మెతుకు చెరువు చుట్టే \_\_\_\_\_

ఎ. నడచు                      బి. అరుచు                      సి. బతుకు                      డి. ఏదికాదు

7. చెరువుల నీళ్ళు ఉంటే \_\_\_\_\_ మెండు

ఎ. సరస్సు ఊటలు              బి. బాయి ఊటలు              సి. సముద్రం ఊటలు              డి. ఏదికాదు

8. శివయ్యకు పాపయ్య ప్రవర్తన \_\_\_\_\_ తోచింది.

ఎ. మంచిగా                      బి. ఆనందంగా              సి. వింతగా                      డి. ఏదికాదు

### III. ఈ క్రింది పదాలకు వ్యతిరేక పదాలు రాయండి – 6 మార్కులు

1. కోపం x \_\_\_\_\_

2. ఇష్టం x \_\_\_\_\_

3. వెలుగు x \_\_\_\_\_

4. మంచి x \_\_\_\_\_

5. నవ్వు x \_\_\_\_\_

6. మేలు x \_\_\_\_\_

### IV. ఈ క్రింది వాక్యాలలో గీత గీసిన పదాల వచనాలను మార్చి రాయండి – 4 మార్కులు

ఉదా:- చెట్టు మీద కాకి ఉన్నది

జ : చెట్టు మీద కాకులు ఉన్నాయి.

1. అమ్మ లడ్డు చేసింది.

జ:- \_\_\_\_\_

2. గోపాల్ పుస్తకం కొన్నాడు.

జ:- \_\_\_\_\_

3. తమ్ముడు సినిమా చూశాడు.

జ:- \_\_\_\_\_

4. పిల్లలు పాట పాడారు.

జ:- \_\_\_\_\_

### V. క్రింది పదాల వరుసలో వేరుగా ఉన్న పదాన్ని గుర్తించి రాయండి – 4 మార్కులు

1. దసరా, బతుకమ్మ, బోనం, ఆగస్ట్ 15 ( )

2. బోనం కుండ, పోతరాజు, తంగెడుపువ్వు, పటం ( )

3. మేక, జింక, గొర్రె, బర్రె ( )

4. బాతు, చిలుక, పావురం, పాలపిట్ట ( )

## VI. క్రింది ప్రశ్నలకు జవాబులు రాయండి – 8 మార్కులు

1. సాలార్ జంగ్ మ్యూజియంలో ఎన్ని అర్రలు ఉన్నాయి ?  
జ:\_\_\_\_\_
2. సాలార్ జంగ్ మ్యూజియంలో ముఖ్యమైనది ఏది ?  
జ:\_\_\_\_\_
3. తెలుగు సంవత్సరాలు ఎన్ని ?  
జ:\_\_\_\_\_
4. పిసినారి పాపయ్య చివరకు ఎన్ని రూపాయలు తిరిగి ఇచ్చేశాడు ?  
జ:\_\_\_\_\_
5. ఉగాది పండుగ రోజు ఏ శ్రవణం జరుపుతారు ?  
జ:\_\_\_\_\_
6. మనజెండా గేయ రచయిత ఎవరు ?  
జ:\_\_\_\_\_
7. తింటే గారెలు తినాలి, వింటే ఏమి వినాలి ?  
జ:\_\_\_\_\_
8. సాలార్ జంగ్ మ్యూజియంలో ఖురాన్ గ్రంథం ఏ సైజులో ఉన్నది ?  
జ:\_\_\_\_\_

## VII. క్రింది వాక్యాలలో నామ వచనాలకు సర్వ నామాల గుర్తించి రాయండి – 3 మార్కులు

1. రాజు చక్కగా చదువుతాడు అతను ఆటలు కూడ ఆడుతాడు
2. రవి రాజు ఇద్దరు స్నేహితులు, వారు కలిసి బడికి వెలుతారు
3. పిల్లి కుక్కను చూసి పరుగెత్తింది. అవి ఒక దాని వెనుక ఒకటి పరుగెతయి

నామవాచకాలు

సర్వనామాలు

\_\_\_\_\_  
\_\_\_\_\_

\_\_\_\_\_  
\_\_\_\_\_

## VIII. క్రింది వాక్యాలు చదివి ఏ కాలంలో ఉన్నాయో రాయండి – 3 మార్కులు

1. గీత పాట పాడింది ( )
2. అమ్మ వంట చేయుచున్నది ( )
3. తమ్ముడు రేపు బడికి వెలుతాడు ( )



## **XI. క్రింది ప్రశ్నలకు జవాబులు రాయండి – 10 మార్కులు**

1. సాలార్ జంగ్ మ్యూజియంలో ఏమేమి ఉన్నాయి?

---

---

---

2. పుణ్యక్షేత్రంలో ఏదైన ఉత్సవం జరిగినప్పుడు అక్కడ ఎట్లా ఉంటుందో రాయండి ?

---

---

---

3. ఎటు చదివిన ఒకేలా ఉండు పదాలు ఐదు రాయండి ?

---

---

---

4. పిల్లికి బచ్చం పెట్టడు అంటే అర్థం ఏమిటి ?

---

---

---

5. చిందులు తొక్కడం అంటే ఏమిటి ?

---

---

---

## X. క్రింది పద్యమును పాద భంగం కాకుండా పూరించండి – 4 మార్కులు

1. ధనమును \_\_\_\_\_  
\_\_\_\_\_  
\_\_\_\_\_  
\_\_\_\_\_ నుల్వినాథా

## XI. క్రింది గద్యభాగాన్ని చదివి ప్రశ్నలకు జవాబులు రాయండి – 4 మార్కులు

చైత్రశుద్ధ పాడ్యమి నాడు ఉగాది పండుగను జరుపుకుంటారు. “యుగాది” శబ్దం రాను రాను ఉగాది గా మారింది. ఉగాది నుండే శిశిర ఋతువు అంతమై వసంత ఋతువు ప్రాంభమవుతుంది. పండుగనాడు ఉదయం ప్రతి ఇంటిలోను ఉగాది పచ్చడి చేస్తారు. వేప పువ్వు, మామిడి ముక్కలు, బెల్లము, చింతపండు మొదలగు వానితో ఉగాది పచ్చడి తయారు చేస్తారు. సాయంకాలం తమ సమీపాన ఉండే దేవాలయాలకు వెళ్ళి దేవుని దర్శించి వచ్చి బ్రాహ్మణుడు పంచాంగ శ్రవణం చేస్తారు. పంచాంగములో తిథి, వారం మొదలగు వివరాలు ఉంటాయి. వ్యాపారస్తులు ఉగాది నుండే తమ లెక్కల పుస్తకాలను ప్రారంభిస్తారు. వారు శ్రీ లక్ష్మీ, గణపతి, సరస్వతులకు పూజ చేసిన తర్వాత వ్యాపార సంబంధమైన పుస్తకాలకు కూడ పూజలు చేస్తారు.

ప్రశ్నలు:-

1. తెలుగు వారు ఉగాదిని ఏ రోజు జరుపుకుంటారు?  
జ :- \_\_\_\_\_
2. ఉగాది రోజు ఉగాది పచ్చడి ఎలా తయారుచేస్తారు?  
జ :- \_\_\_\_\_
3. ఉగాది నాటి సాయంకాలం వ్యాపారస్తులు ఎవరికి పూజ చేస్తారు?  
జ :- \_\_\_\_\_
4. వ్యాపారస్తులు వేటికి సంబంధించిన పుస్తకాలకు పూజలు చేస్తారు ?  
జ :- \_\_\_\_\_

## XII. క్రింది ప్రశ్నలలో రెండింటికి జవాబులు రాయండి – 8 మార్కులు

1. పాపయ్యను అందరు పిసినారి అనడం సరైనదేనా? ఎందుకు ?

---

---

---

2. పుణ్య క్షేత్రాలకు వెళ్ళేటప్పుడు ఏమిమి జాగ్రత్తలు తీసుకోవాలి?

---

---

---

3. చెరువు చుట్టే మన బ్రతుకులు ఎందుకన్నావు?

---

---

---

### XIII. క్రింది వ్యాసాలలో ఒక దాని గురించి రాయండి

— 8 మార్కులు

**విద్యార్థులు – క్రమశిక్షణ**

**ಲೆಡಾ**

మన మాతృబాష - తెలుగు

This image shows a blank sheet of white paper with horizontal ruling lines. The lines are evenly spaced and run across the width of the page. There are no margins, text, or other markings on the paper.